

How many tens and ones are in this number?


45

You can draw models to show the answer.




Draw the tens.

I draw one line for each ten.




Then draw the ones.

I draw a dot for each one.



You can count by 10s and 1s to check your work.

10, 20, 30, 40...
41, 42, 43, 44, 45.




There are 4 tens and 5 ones in 45.




Convince Me! When you draw to model a number, which digit tells you how many lines to draw? Which digit tells you how many dots to draw?

☆ **Guided Practice** ☆ Write the numbers and draw a model to show each number. Count by tens and ones to check.

1. 17 is 1 ten and 7 ones.



2. 29 is 2 tens and 9 ones.



Name _____

Independent Practice

Write the numbers and draw a model to show each number. Count by tens and ones to check.

3. There are _____ tens and _____ ones in 43.

4. There are _____ tens and _____ ones in 86.

5. There are _____ ten and _____ ones in 15.

6. There are _____ tens and _____ ones in 37.


7. There are _____ tens and _____ ones in 62.

8. There are _____ tens and _____ ones in 24.

Problem Solving

Solve the problems below.

9. **Model** Kevin draws the model below to show a number. What number is Kevin showing?



10. **enVision[®] STEM** Gina is collecting data on the number of hours of daylight in the fall and winter. She records data for 68 days. Draw a model to show 68.



11. **Higher Order Thinking** Peyton starts drawing a model for the number 48, but she is interrupted. Help her finish her model.



12. **Assessment Practice** Which number is represented here?



- 5 11 23 32
Ⓐ Ⓑ Ⓒ Ⓓ